

Name: _____

Look at the fingers. Write how many more to make 10.




+



= 10




+



= 10



+



= 10




+



= 10



+



= 10




+



= 10



+



= 10



Name: _____

Draw a line to match the numbers that make 10.

1	.	.	0
2	.	.	8
3	.	.	6
4	.	.	7
5	.	.	4
6	.	.	5
7	.	.	9
8	.	.	1
9	.	.	2
10	.	.	3



Name: _____

Circle the two numbers that add up to 10.

1

9

3

7

2

8

4

5

6

10

0

1

3

6

7

2

9

1

5

5

2

3

6

4



Name: _____

Some fingers are hidden. How many fingers are hidden to make it equal? Write your answer.

+



=

5

+



=

7

+



=

4

+



=

8

+



=

2

+



=

6

+



=

10



Name: _____

Read the problem and write the missing number.



Liam has 7 toy cars.
He wants 10 cars.
How many more does he
need?

Answer:



Mia has 3 balloons.
She wants 5 balloons.
How many more does she
need?

Answer:



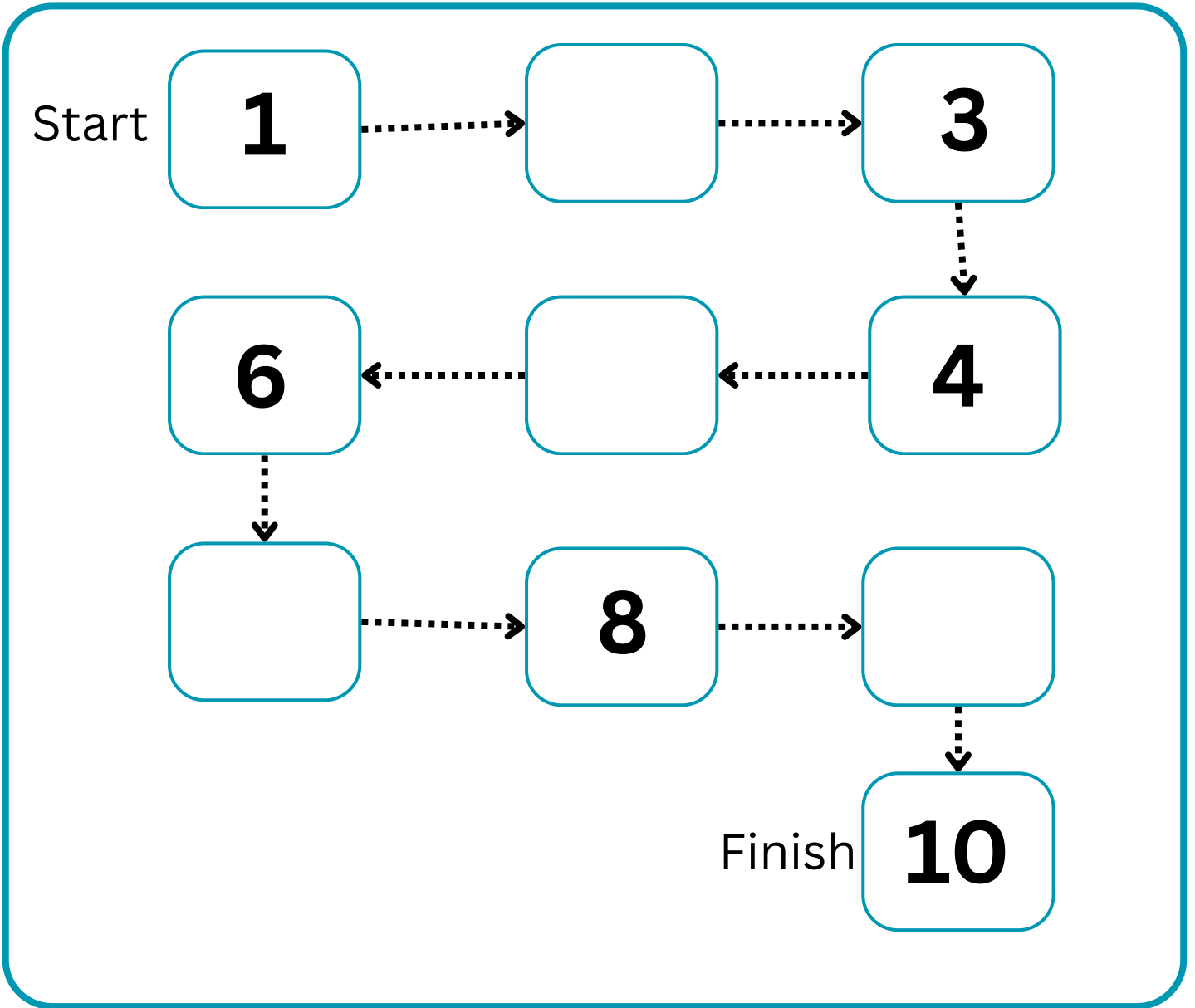
Ben has 6 cookies.
He wants 10 cookies.
How many more does he
need.

Answer:



Name: _____

Cut and paste the missing numbers in the correct boxes.



2

5

7

9

