

Name: _____

Fill in the missing number to make 5.

$$\text{✌️} + \underline{\quad} = 5$$

$$\text{✋️} + \underline{\quad} = 5$$

$$\text{👉} + \underline{\quad} = 5$$

$$\text{✋️} + \underline{\quad} = 5$$

$$4 + \underline{\quad} = 5$$

$$2 + \underline{\quad} = 5$$



Name: _____

Draw a line to match numbers that make 5.

4

2

3

1

1

4

2

5

0

3



Name: _____

Color the pairs that make 5.

$1 + 4$

$3 + 1$

$2 + 2$

$5 + 0$

$1 + 1$

$3 + 2$

$4 + 2$

$2 + 1$

$2 + 3$

$3 + 3$





Name: _____


Write how many fingers are hidden.


 (5 fingers total)

 → _____

 → _____

 → _____

 → _____

 → _____



Name: _____

Directions: Solve

1. Mia has 2 candies. How many more to make 5? ____
2. John has 4 toys. How many more to make 5? ____
3. Anna has 1 ball. How many more to make 5? ____
4. Leo has 3 apples. How many more to make 5? ____
5. Sam has 0 cookies. How many more to make 5? ____

Color the hand brown.

