

Name: _____

COUNT ON

Start with the bigger number. Count on using your fingers.

Write the answer in the box.

$5 + 2 =$  

$4 + 3 =$  

$6 + 1 =$  

$3 + 2 =$  

$2 + 3 =$  

$7 + 2 =$  



Name: _____

FINGER HOP

Start with the first number. Count on the second number.

Write the answer.

$$4 + 3 = \boxed{4} \quad \boxed{} \quad \boxed{} \quad \boxed{} = \boxed{}$$

$$5 + 2 = \boxed{5} \quad \boxed{} \quad \boxed{} = \boxed{}$$

$$6 + 3 = \boxed{6} \quad \boxed{} \quad \boxed{} \quad \boxed{} = \boxed{}$$

$$7 + 1 = \boxed{7} \quad \boxed{} = \boxed{}$$

$$3 + 3 = \boxed{3} \quad \boxed{} \quad \boxed{} \quad \boxed{} = \boxed{}$$

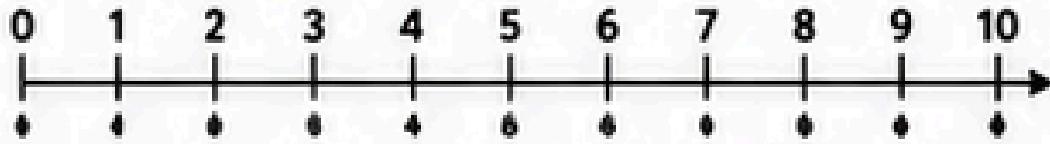
$$8 + 2 = \boxed{8} \quad \boxed{} \quad \boxed{} = \boxed{}$$




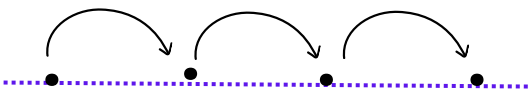
Name: _____


NUMBER LINE JUMP

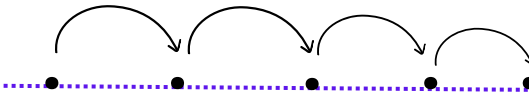
Use the number line. Start at the first number and jump forward the second number. Write the answer.




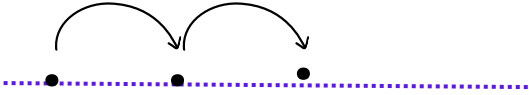
$6 + 2 = \textcircled{6}$  =


$3 + 4 = \textcircled{3}$  =

$5 + 3 = \textcircled{5}$  =

$2 + 5 = \textcircled{2}$  =

$7 + 2 = \textcircled{7}$  =

$9 + 3 = \textcircled{9}$  =

$8 + 4 = \textcircled{8}$  =



Name: _____

STORY PROBLEM

Read the problems. Count on to find the answer.

1.) Emma has 5 apples.

She gets 2 more.

How many apples does she have now?



Answer:

Start at 5. Count on 2.

2.) Noah has 6 toy cars.

His dad gives him 3 more.

How many toy cars does he have now?



Answer:

Start at 6. Count on 3.

3.) Mia has 7 balloons.

She gets 2 more.

How many balloons does she have now?



Answer:

Start at 7. Count on 2.



Name: _____

WHICH NUMBER DO WE START WITH?

Circle the bigger number. Then, write the sum.

$$\boxed{3 + 5} \longrightarrow \underline{\quad} + \underline{\quad} = \underline{\quad}$$

$$\boxed{2 + 7} \longrightarrow \underline{\quad} + \underline{\quad} = \underline{\quad}$$

$$\boxed{6 + 4} \longrightarrow \underline{\quad} + \underline{\quad} = \underline{\quad}$$

$$\boxed{1 + 8} \longrightarrow \underline{\quad} + \underline{\quad} = \underline{\quad}$$

$$\boxed{5 + 3} \longrightarrow \underline{\quad} + \underline{\quad} = \underline{\quad}$$

$$\boxed{9 + 1} \longrightarrow \underline{\quad} + \underline{\quad} = \underline{\quad}$$



Name: _____

COUNT ON DRILL

Start with the first number. Count on the second number.

Write the answer.

$4 + 2 = \square$

$4 + 5 = \square$

$6 + 2 = \square$

$3 + 5 = \square$

$3 + 4 = \square$

$1 + 6 = \square$

$2 + 5 = \square$

$5 + 4 = \square$

$6 + 1 = \square$

$3 + 3 = \square$

$7 + 2 = \square$

$2 + 7 = \square$

$8 + 1 = \square$

$7 + 3 = \square$

