



Name: _____

SUBTRACTION - Fill out the box with the right answer.




$$6 - 2 = \square$$




$$8 - 4 = \square +$$




$$3 - 2 = \square$$



$$5 - 4 = \square$$



$$3 - 0 = \square$$



$$10 - 3 = \square$$